


## EYFS (Nursery and Reception)

Go on a shape hunt in your house. What shapes can you find?

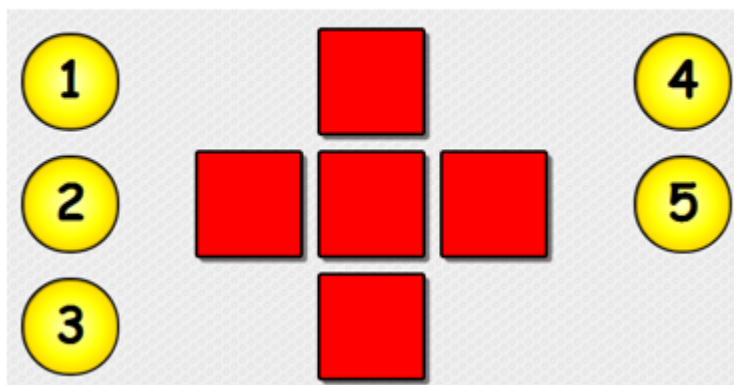
Draw the shapes on a piece of paper.



Extra challenge: see if you can count the number of sides and corners that each shape has.

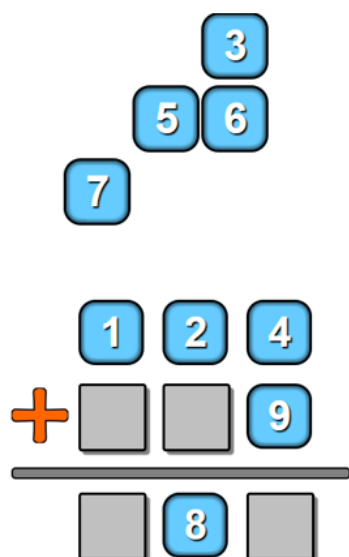
## KS1 (Year 1 & 2)

Arrange the numbers in the cross so that the sum of the numbers in the vertical line is the same as the sum of the numbers in the horizontal line.



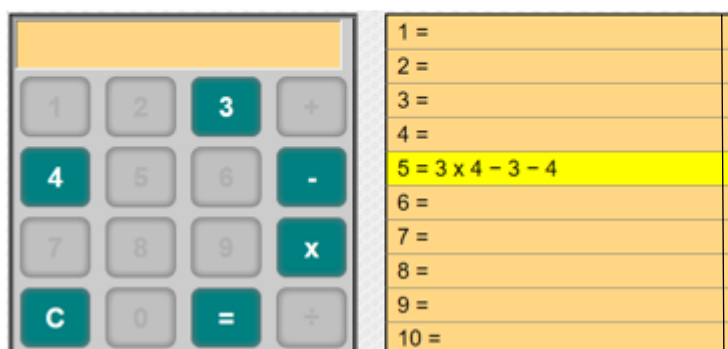
## LKS2 (Year 3 & 4)

Arrange the digits below to complete the addition problem.



## UKS2 (Year 5 & 6)

Use the keys on this broken calculator to make the totals from one to ten. Five has already been done as an example.



Name: \_\_\_\_\_

Year: \_\_\_\_\_

Working out space:

Now explain how you solved the problem!

Remember you can work the challenge out any way you would like to: draw pictures, use materials like buttons as counters, count in your head... Just make sure you show this on your solution paper!